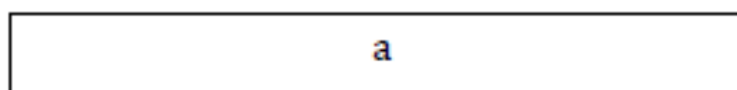
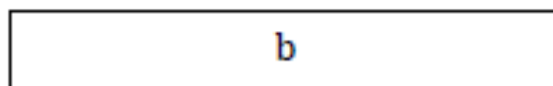


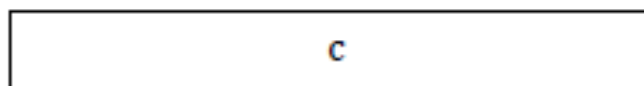
1 Utilise la règle pour mesurer les bandes.



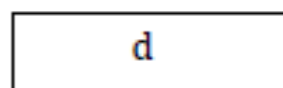
La bande a mesure cm.



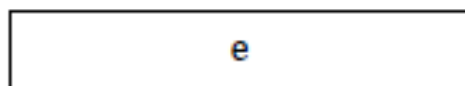
La bande b mesure cm.



La bande c mesure cm.



La bande d mesure cm.



La bande e mesure cm.