

NOM:



.....


Géom

Les quadrilatères

1. Écris la(les) différences entre les figures formées.
2. Écris le nom de chaque figure.





.....
.....



.....
.....



.....
.....



.....
.....





.....

.....




.....

.....



.....

.....



.....

.....